









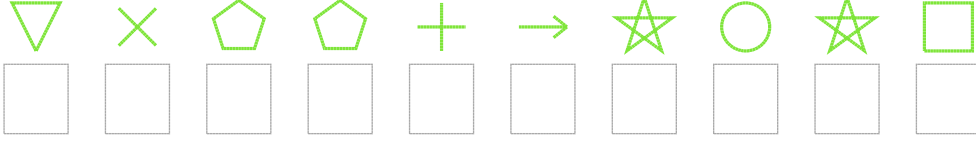


# Şekil Sayı Eşleştirme

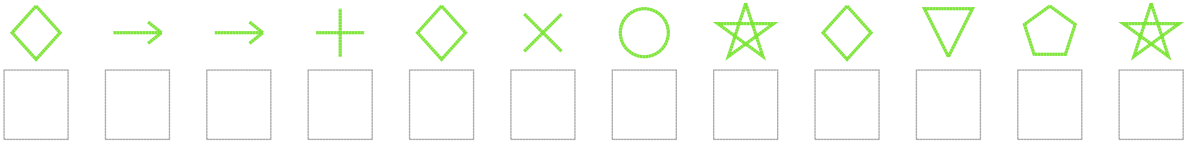
 = 7	 = 4	 = 2	 = 0	 = 1	 = 5	 = 9	 = 6	 = 8	 = 3
--	--	--	--	--	--	---	--	--	--

Aşağıdaki uzun şifreleri hatasız çözerek altlarına yazın:

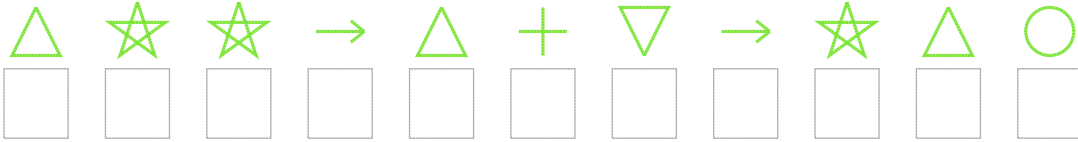
1. Şifre



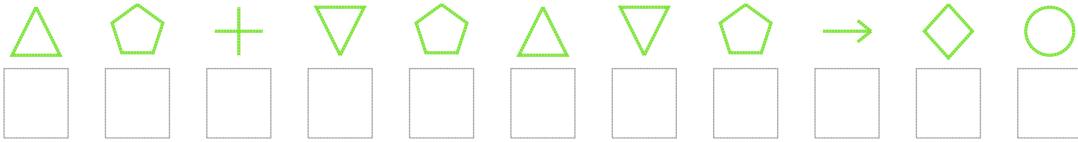
2. Şifre



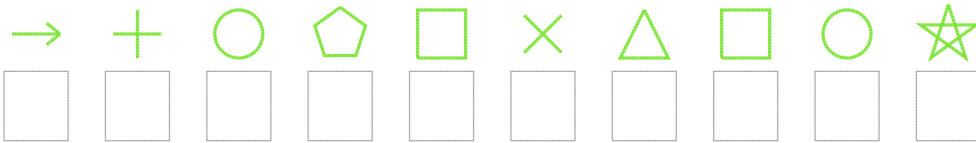
3. Şifre



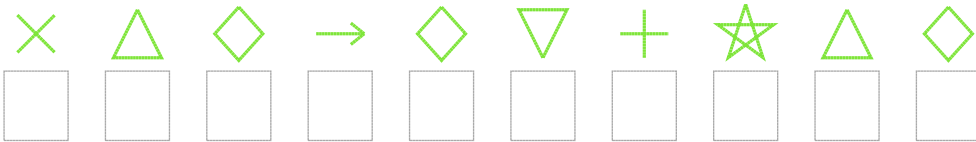
4. Şifre



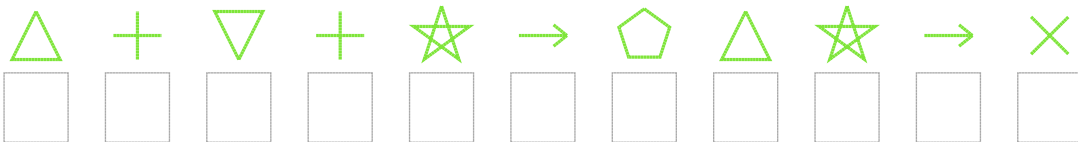
5. Şifre



6. Şifre



7. Şifre



❑ BONUS: 3. ve 1. şifrenin üçüncü rakamının toplamı kaçtır? .....

## Cevap Anahtarı

1. Şifre: 9022437175
2. Şifre: 633460176927
3. Şifre: 87738493781
4. Şifre: 82492892361
5. Şifre: 3412508517
6. Şifre: 0863694786
7. Şifre: 84947328730

□ Bonus Soru Cevabı: 9